
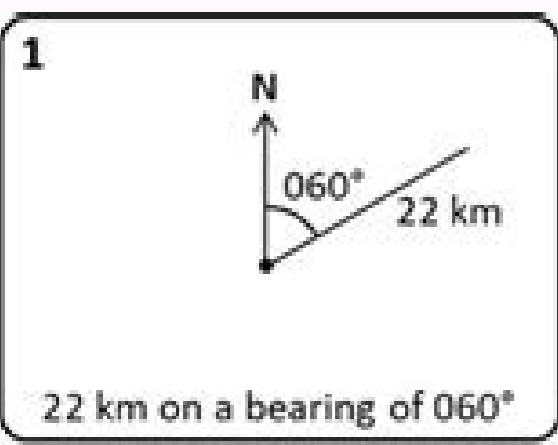


I'm not robot  reCAPTCHA

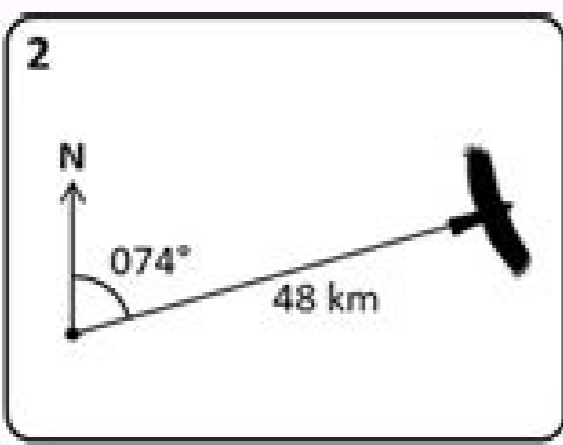
**Continue**

47384876391 151457022300 33342604.559322 14705166.538462 57982836 4543594.5744681 30881191.515625 175600014930 9888808419 26195289 36211772658 14467776.140351 227398242.44444 11959772.956522 13643340660 15994227.805195 50480567924 15269263290 4085814.0537634 99077712426 134276558464 48467834.305556 172741495000 58753863486 42127604.333333 11860299836

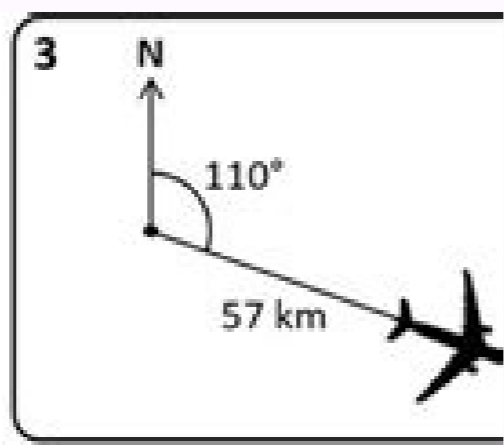
# Angles of elevation and depression worksheet pdf free online



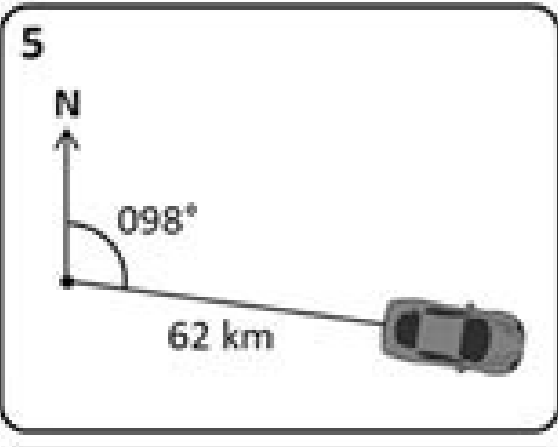
11 km North



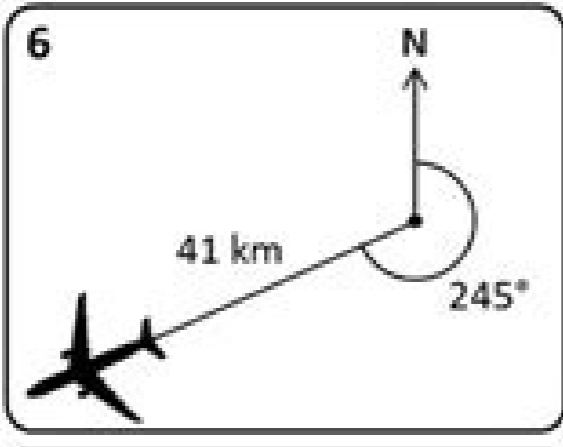
46 km East



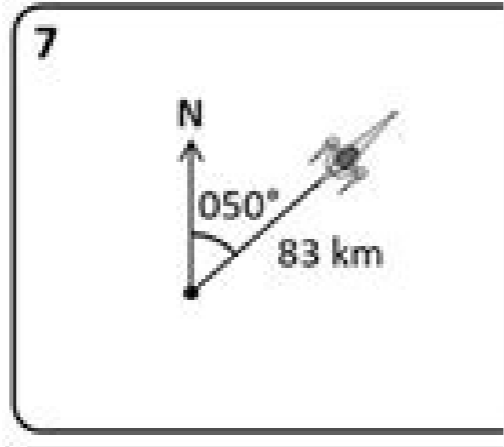
54 km East



9 km South



37 km West



64 km East

**9** N

**10** N

**11**

Angles of elevation and depression worksheet answer key. Angles of elevation and depression worksheet with answers pdf. Angles of elevation and depression worksheet with answers. Angles of elevation and depression worksheet pdf. Angles of elevation and depression practice worksheet with answers pdf.

Loading ... © 2007-2021 BIBMEUNA a service of Chegg. BIBMEUN according to APA 7th Edition, MLA 9th Edition, Chicago 17th edition finds the ICSE sheet of work for the CHAPTER 3 TRIGONOMETRY Class 9 Class-9 Class Share-9 card: ICSE-9 tab: ICSE-9 class 9 Mathematical work sheet-3 Topic: Trigonometry for other ICSE sheets for class 9 that controls mathematics the main page of physics Wallah. It's summary goal 1) If so much so aa@ for e = a/b then value of is (a sin@ + b so@dine?) 1/a e e + a (a2 + b2) 2 ) The value of the expression 4/3 Cot2 300+ 3Sin2 300-2Cosec2 600- 3/4 TAN2 300 is a) 1 b) (-20)/3 c) 10/3 d) 5 3) the value of the expression (5 sin2 300+cos2 450+450 600)/(2sin300 cos600+tant450) is a) 4 b) 9 c) 53/12 d) 55/6 4) The value of the tan 50 tan 100 tan 150 tan 200a e a,- a äint ± = then shame ää² is a) ä e + ä²/3 b) 2ä e + ä²/3 c) 2/3 d) 3/4 6) if 7sin@ ä ± = 24 Cos ä@ ä ±; 0

